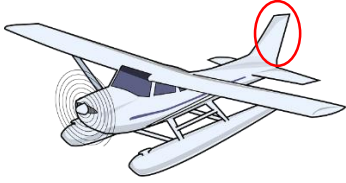


# Aviation English Test 12

## Fill in the Blanks

1-)



What is the name of the part indicated in the red circle?

.....

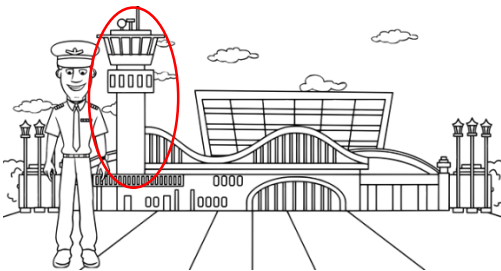
2-)



What is the name of the part of the runway indicated in the red circle?

.....

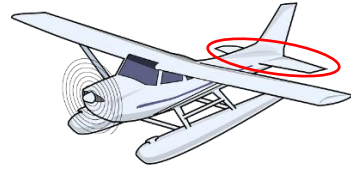
3-)



What is the name of the building indicated in the red circle?

.....


4-)



What is the name of the part indicated in the red circle?

.....

5-)



Who is the man who directs the plane to the parking position?

.....

6-)



What is the name of the part indicated in the red circle?

.....

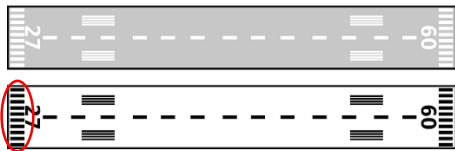
7-)



What is the name of this aircraft capable of taking off and landing on water?

.....

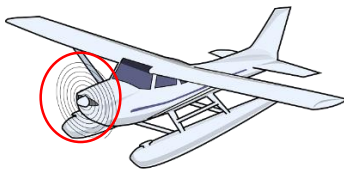
8-)



What is the name of the markings indicated in the red circle?

.....

9-)



What is the name of the part indicated in the red circle?

.....

10-)



What is the name of the part indicated in the red circle?

.....

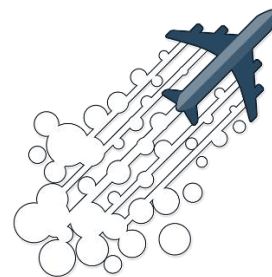
11-)



What is the name of this aircraft?

.....


12-)



What is the name of the white spots coming from the back of the plane?

.....

13-)



What is the name of these aircraft?

.....

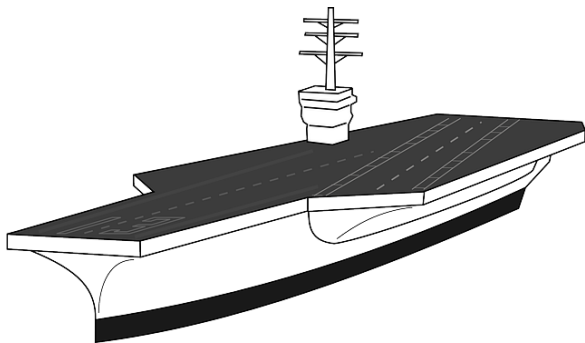
14-)



What is the name of the part pointed in the red circle?

.....

15-)



What is the name of this vehicle?

.....

**Answers:**

1. Vertical Stabilizer
2. Runway Designator
3. Air Traffic Control Tower
4. Horizontal Stabilizer
5. Aircraft Marshaller
6. Nose Landing Gear
7. Seaplane
8. Threshold Markings
9. Propeller
10. Jet Engine
11. Hot Air Balloon
12. Contrails/Chemtrails
13. Glider
14. Winglets
15. Airship